





NAME _____

DATE _____



Add Nine & Add Ten Facts Version A

1 Solve each problem.

 $10 + 4 = \underline{\quad}$	 $10 + 6 = \underline{\quad}$	 $9 + 3 = \underline{\quad}$	 $9 + 7 = \underline{\quad}$
---	---	---	--

2 Fill in the blanks.

$10 + 2 = \underline{\quad}$
 $9 + 2 = \underline{\quad}$
 $10 + 5 = \underline{\quad}$
 $9 + 5 = \underline{\quad}$

$10 + 9 = \underline{\quad}$
 $9 + 9 = \underline{\quad}$
 $4 + 10 = \underline{\quad}$
 $4 + 9 = \underline{\quad}$





NAME _____

DATE _____



Add Nine & Add Ten Facts Version A

1 Solve each problem.

 $10 + 4 = \underline{\quad}$	 $10 + 6 = \underline{\quad}$	 $9 + 3 = \underline{\quad}$	 $9 + 7 = \underline{\quad}$
---	---	---	--

2 Fill in the blanks.

$10 + 2 = \underline{\quad}$
 $9 + 2 = \underline{\quad}$
 $10 + 5 = \underline{\quad}$
 $9 + 5 = \underline{\quad}$

$10 + 9 = \underline{\quad}$
 $9 + 9 = \underline{\quad}$
 $4 + 10 = \underline{\quad}$
 $4 + 9 = \underline{\quad}$

NAME _____

DATE _____



Add Nine & Add Ten Facts Version B

1 Solve each problem.

 $9 + 2 = \underline{\quad}$	 $9 + 8 = \underline{\quad}$	 $10 + 5 = \underline{\quad}$	 $10 + 3 = \underline{\quad}$
---------------------------------	---------------------------------	----------------------------------	----------------------------------

2 Fill in the blanks.

$10 + 0 = \underline{\quad}$
 $9 + 0 = \underline{\quad}$
 $10 + 3 = \underline{\quad}$
 $9 + 3 = \underline{\quad}$

$10 + 1 = \underline{\quad}$
 $9 + 1 = \underline{\quad}$
 $10 + 7 = \underline{\quad}$
 $9 + 7 = \underline{\quad}$

NAME _____

DATE _____



Add Nine & Add Ten Facts Version B

1 Solve each problem.

 $9 + 2 = \underline{\quad}$	 $9 + 8 = \underline{\quad}$	 $10 + 5 = \underline{\quad}$	 $10 + 3 = \underline{\quad}$
---------------------------------	---------------------------------	----------------------------------	----------------------------------

2 Fill in the blanks.

$10 + 0 = \underline{\quad}$
 $9 + 0 = \underline{\quad}$
 $10 + 3 = \underline{\quad}$
 $9 + 3 = \underline{\quad}$

$10 + 1 = \underline{\quad}$
 $9 + 1 = \underline{\quad}$
 $10 + 7 = \underline{\quad}$
 $9 + 7 = \underline{\quad}$