

NAME _____


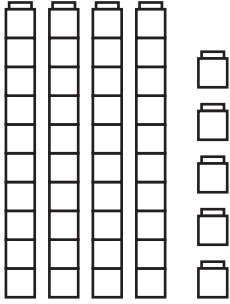
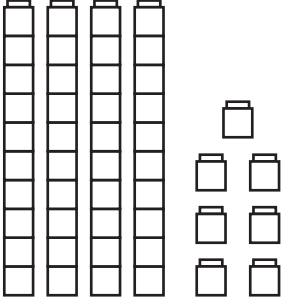
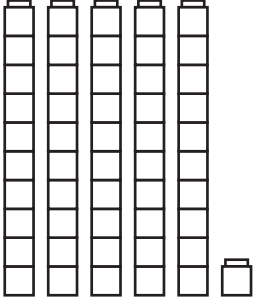
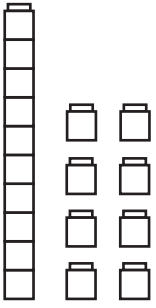
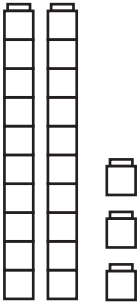
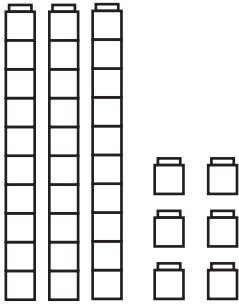
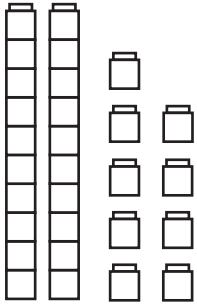
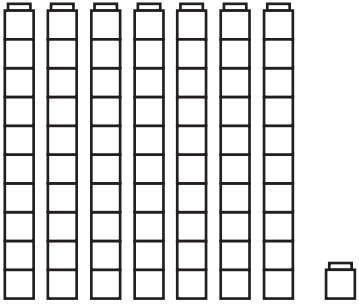
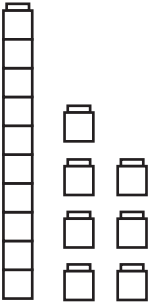
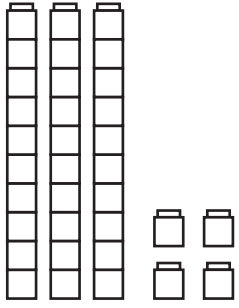
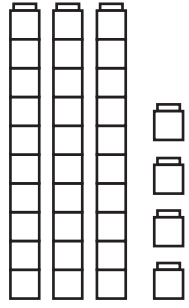
DATE _____



Comparing Numbers to One Hundred Version A

Here are six pairs of Unifix cube collections. Count to find out which collection is greater (more) and which collection is less (has fewer cubes). Write numbers and signs to show.

< less than = the same as > greater than

			
<p>_____ ○ _____</p>	<p>_____ ○ _____</p>	<p>_____ ○ _____</p>	<p>_____ ○ _____</p>
			
<p>_____ ○ _____</p>	<p>_____ ○ _____</p>	<p>_____ ○ _____</p>	<p>_____ ○ _____</p>
			
<p>_____ ○ _____</p>	<p>_____ ○ _____</p>	<p>_____ ○ _____</p>	<p>_____ ○ _____</p>