


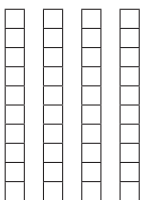


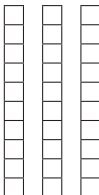


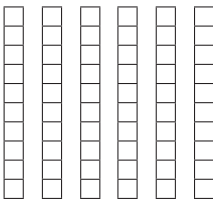

NAME _____

DATE _____



Expanded Notation with Three-Digit Numbers Version A

1 Write the value of the base ten pieces. Then write an equation to show the total value in expanded form.

| | Hundreds | Tens | Ones | Value | Equation |
|-----------|---|---|---|-------|----------------------|
| ex |  |  |  | 245 | $200 + 40 + 5 = 245$ |
| a |  |  |  | | |
| b |  |  |  | | |

2 Which of the groups of base ten pieces above has the greater total—**a** or **b**? Compare their values using numbers and a symbol.

< less than = the same as > greater than

_____ ○ _____